

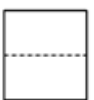
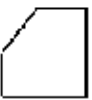



浙教版初三数学下第三章 三视图与表面展开图 同步练习 3.2 简单物体的三视图

1. 选择题

如图是一个正方体被截去一个直三棱柱得到的几何体，则该几何体的左视图()







- A.  B.  C.  D. 

2. 选择题

如图所示的几何体的主视图是()








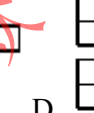
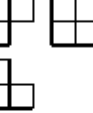
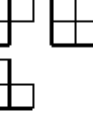




- A.  B.  C.  D. 

3. 选择题

如图所示的几何体的三视图是()


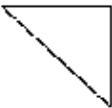


- A.    B.    C.    D.   

4. 选择题

如图是一个正方体截去一角后得到的几何体，它的主视图是



- A.  B.  C. 